

Technical Support Center: NMR Signal Assignment for 4-Aminochroman-3-ol

Author: BenchChem Technical Support Team. **Date:** December 2025

Compound of Interest

Compound Name: 4-Aminochroman-3-ol

Cat. No.: B1641235

[Get Quote](#)

This technical support center provides troubleshooting guidance and frequently asked questions (FAQs) to assist researchers, scientists, and drug development professionals in resolving common NMR signal assignment issues encountered with **4-Aminochroman-3-ol**.

Troubleshooting Guide

Signal assignment for **4-Aminochroman-3-ol** can be challenging due to its complex structure, leading to potential issues such as signal overlap and the presence of diastereotopic protons. This guide outlines common problems, their probable causes, and recommended solutions.

Problem	Probable Cause(s)	Recommended Solution(s)
Signal Overlap in the Aliphatic Region	The signals for H-2, H-3, and H-4 protons may overlap, making it difficult to determine their precise chemical shifts and coupling constants. This is especially true for the diastereotopic protons at the C-2 position.	<ul style="list-style-type: none">- Utilize 2D NMR techniques: COSY, HSQC, and HMBC experiments are essential for resolving overlapping signals and establishing connectivity between protons and carbons. [1][2]- Vary the solvent: Changing the NMR solvent can induce changes in chemical shifts, potentially resolving overlapped peaks. [3]- Adjust the temperature: Lowering the temperature may slow down conformational changes, leading to sharper signals and better resolution. [4]
Difficulty in Assigning Diastereotopic Protons	The two protons on C-2 (H-2a and H-2b) are diastereotopic due to the chiral center at C-3, meaning they are chemically non-equivalent and will have different chemical shifts and coupling constants. [5][6][7]	<ul style="list-style-type: none">- Analyze coupling patterns: Carefully examine the multiplicity and coupling constants of the signals. H-2a and H-2b will appear as separate multiplets, each coupled to the other (geminal coupling) and to the H-3 proton (vicinal coupling).- NOESY/ROESY experiments: These through-space correlation experiments can help to differentiate between the diastereotopic protons based on their spatial proximity to other protons in the molecule.

Ambiguous Aromatic Proton Assignments	The four aromatic protons (H-5, H-6, H-7, and H-8) can have similar chemical shifts, making their individual assignment challenging.	<ul style="list-style-type: none">- Analyze coupling patterns: The ortho, meta, and para coupling constants between the aromatic protons can be used to determine their relative positions.^[8]^[9]- HMBC experiment: Long-range correlations between the aromatic protons and the carbons of the chroman ring system can confirm their assignments.
Broad or Disappearing NH ₂ and OH Signals	The protons of the amino (NH ₂) and hydroxyl (OH) groups can undergo chemical exchange with residual water in the solvent or with each other, leading to broad signals or their complete disappearance from the spectrum. ^[10]	<ul style="list-style-type: none">- Use a dry solvent: Ensure the NMR solvent is thoroughly dried to minimize exchange broadening.- D₂O exchange: Add a drop of deuterium oxide (D₂O) to the NMR tube. The NH₂ and OH protons will exchange with deuterium, causing their signals to disappear from the ¹H NMR spectrum, thus confirming their identity.^[10]- Low-temperature NMR: Cooling the sample can slow down the exchange rate, resulting in sharper signals for the NH₂ and OH protons.

Predicted NMR Data for 4-Aminochroman-3-ol

The following tables summarize the predicted ¹H and ¹³C NMR chemical shifts for the cis and trans isomers of **4-Aminochroman-3-ol**. This data was generated using NMR prediction software and should be used as a guide for initial assignments. Actual experimental values may vary.

Predicted ^1H NMR Chemical Shifts (ppm)

Proton	Predicted Shift (cis)	Predicted Shift (trans)	Multiplicity	Coupling Constants (J, Hz)
H-2a	~4.2 - 4.4	~4.1 - 4.3	dd	$J_{\text{gem}} \approx 11\text{-}12$, $J_{\text{vic}} \approx 3\text{-}5$
H-2b	~4.0 - 4.2	~3.9 - 4.1	dd	$J_{\text{gem}} \approx 11\text{-}12$, $J_{\text{vic}} \approx 5\text{-}7$
H-3	~3.8 - 4.0	~3.7 - 3.9	m	-
H-4	~3.5 - 3.7	~3.6 - 3.8	d	$J \approx 4\text{-}6$
H-5	~7.1 - 7.3	~7.1 - 7.3	d	$J_{\text{ortho}} \approx 7\text{-}9$
H-6	~6.8 - 7.0	~6.8 - 7.0	t	$J_{\text{ortho}} \approx 7\text{-}9$, $J_{\text{meta}} \approx 1\text{-}3$
H-7	~6.9 - 7.1	~6.9 - 7.1	t	$J_{\text{ortho}} \approx 7\text{-}9$, $J_{\text{meta}} \approx 1\text{-}3$
H-8	~6.7 - 6.9	~6.7 - 6.9	d	$J_{\text{ortho}} \approx 7\text{-}9$
NH ₂	variable	variable	br s	-
OH	variable	variable	br s	-

Predicted ^{13}C NMR Chemical Shifts (ppm)

Carbon	Predicted Shift (cis)	Predicted Shift (trans)
C-2	~68 - 72	~67 - 71
C-3	~65 - 69	~66 - 70
C-4	~50 - 54	~51 - 55
C-4a	~120 - 124	~120 - 124
C-5	~128 - 132	~128 - 132
C-6	~120 - 124	~120 - 124
C-7	~122 - 126	~122 - 126
C-8	~116 - 120	~116 - 120
C-8a	~150 - 154	~150 - 154

Experimental Protocols

A comprehensive NMR analysis of **4-Aminochroman-3-ol** requires a suite of 1D and 2D experiments.

1. Sample Preparation:

- Dissolve 5-10 mg of the compound in 0.5-0.7 mL of a suitable deuterated solvent (e.g., CDCl₃, DMSO-d₆, or MeOD).
- Filter the solution into a standard 5 mm NMR tube.

2. ¹H NMR:

- Acquire a standard 1D ¹H NMR spectrum to observe the proton chemical shifts, multiplicities, and integration.

3. ¹³C NMR:

- Acquire a proton-decoupled ¹³C NMR spectrum to identify the chemical shifts of all carbon atoms.

- Run a DEPT-135 experiment to differentiate between CH, CH₂, and CH₃ groups.

4. 2D NMR:

- COSY (Correlation Spectroscopy): To identify proton-proton couplings, particularly within the aliphatic and aromatic spin systems.
- HSQC (Heteronuclear Single Quantum Coherence): To correlate each proton with its directly attached carbon. This is crucial for assigning the signals of the chroman ring.
- HMBC (Heteronuclear Multiple Bond Correlation): To identify long-range (2-3 bond) correlations between protons and carbons. This is useful for confirming the overall structure and assigning quaternary carbons.
- NOESY (Nuclear Overhauser Effect Spectroscopy) / ROESY (Rotating-frame Overhauser Effect Spectroscopy): To determine the stereochemistry (cis/trans) by observing through-space correlations between protons. For example, a NOE between H-3 and H-4 would suggest a cis relationship.

Frequently Asked Questions (FAQs)

Q1: Why are there more than the expected number of signals in the aliphatic region of the ¹H NMR spectrum?

A1: The presence of a chiral center at C-3 makes the two protons on the adjacent C-2 carbon diastereotopic.^{[5][6][7]} This means they are in different chemical environments and will therefore have distinct chemical shifts and coupling constants, leading to two separate signals instead of one.

Q2: How can I distinguish between the cis and trans isomers of **4-Aminochroman-3-ol** using NMR?

A2: The key to differentiating between the cis and trans isomers lies in the vicinal coupling constant (³J) between H-3 and H-4, which can be determined from the ¹H NMR spectrum. The magnitude of this coupling constant is dependent on the dihedral angle between the two protons, as described by the Karplus relationship.

- For the cis isomer, a smaller coupling constant is generally expected (typically in the range of 2-5 Hz).
- For the trans isomer, a larger coupling constant is typically observed (generally in the range of 8-12 Hz). Additionally, NOESY or ROESY experiments can provide definitive proof of stereochemistry. A cross-peak between H-3 and H-4 would indicate that they are on the same side of the ring, confirming a cis configuration.

Q3: The chemical shifts of my NH₂ and OH protons are different from the predicted values and are very broad. Why is this?

A3: The chemical shifts of exchangeable protons like those in amino (NH₂) and hydroxyl (OH) groups are highly dependent on factors such as solvent, concentration, and temperature.^[11] They readily participate in hydrogen bonding and can exchange with other labile protons (like water) in the sample. This exchange process leads to signal broadening. To confirm their assignment, you can perform a D₂O exchange experiment.

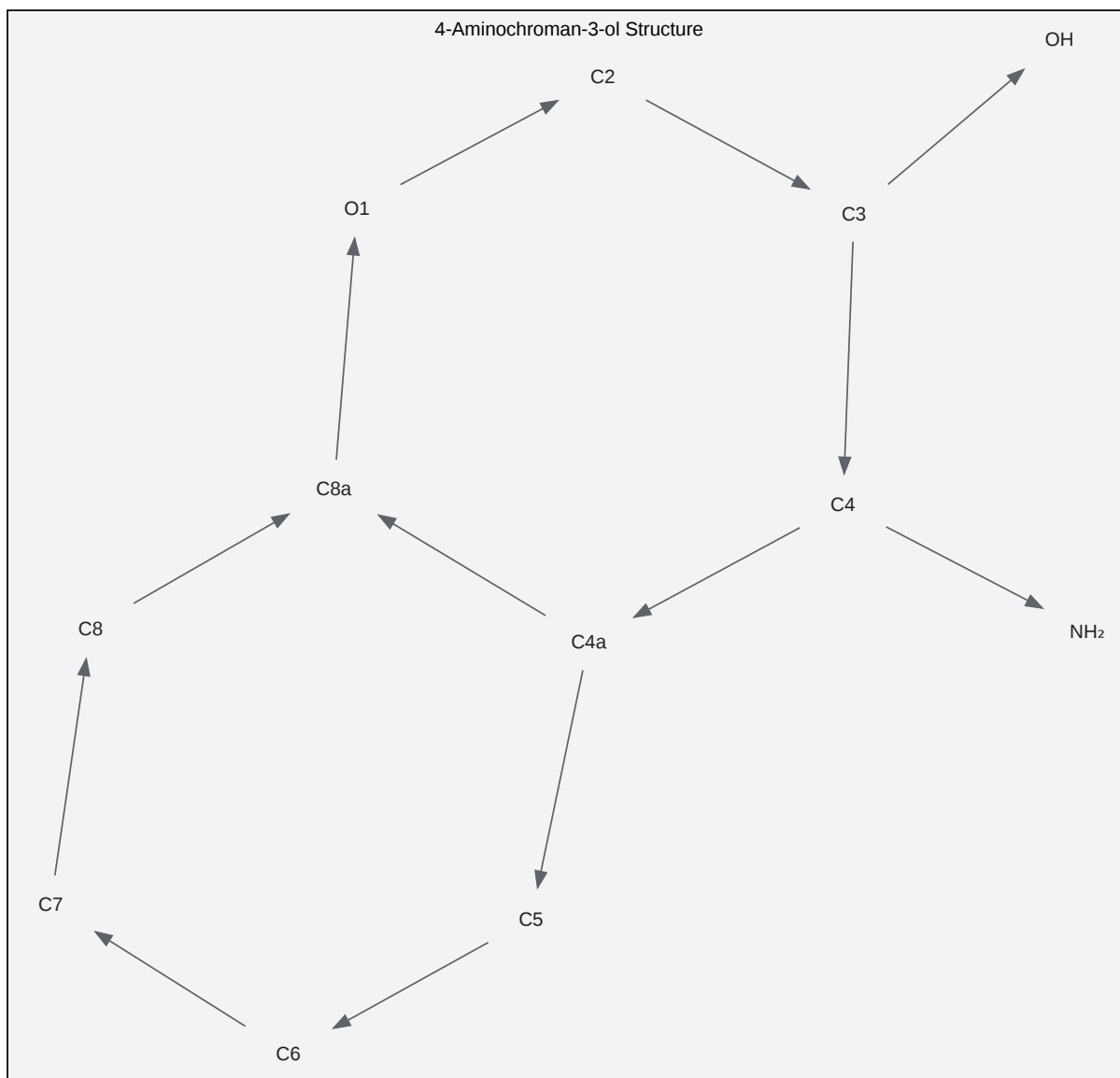
Q4: I am having trouble assigning the aromatic protons. What is the best approach?

A4: The assignment of the four aromatic protons can be achieved by a combination of analyzing their coupling patterns (multiplicities and coupling constants) and using 2D NMR techniques.

- Coupling Constants: Protons that are ortho to each other will have a large coupling constant ($^3J \approx 7-9$ Hz). Meta coupling is smaller ($^4J \approx 1-3$ Hz), and para coupling is often not resolved.
- COSY: This experiment will show correlations between adjacent (ortho) protons.
- HMBC: This experiment will reveal long-range correlations from the aromatic protons to carbons within the aromatic ring and to C-4a and C-8a of the heterocyclic ring, which can help to unambiguously assign their positions.

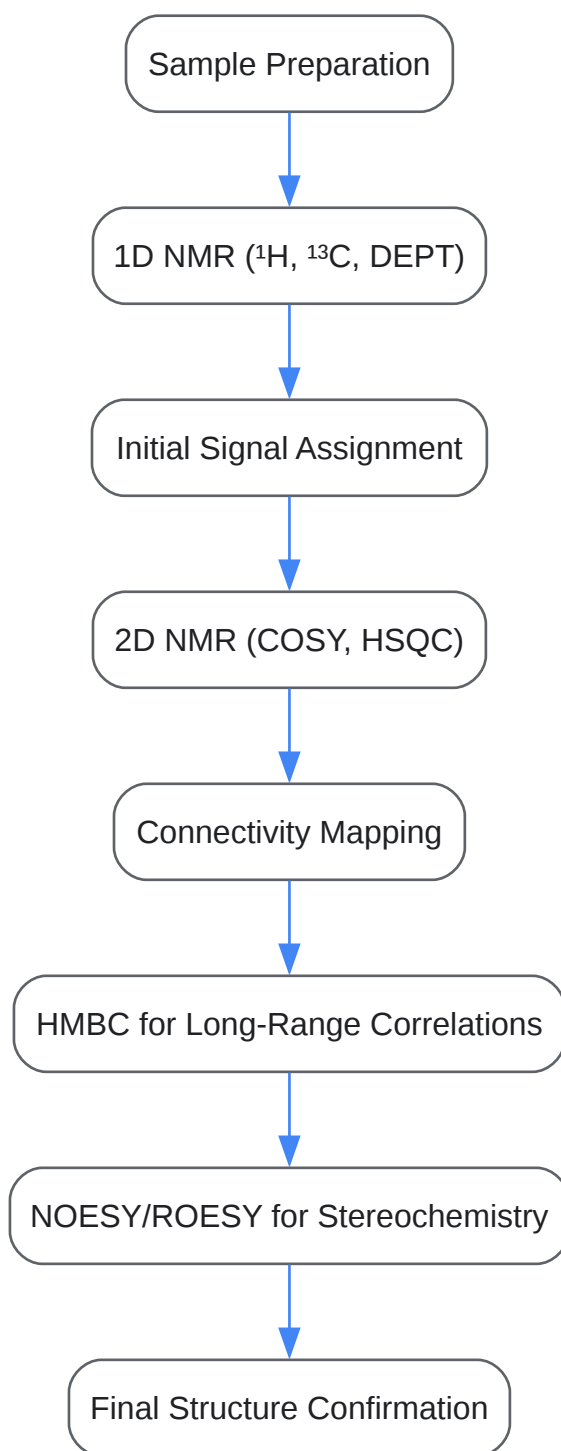
Visualizations

The following diagrams illustrate the structure of **4-Aminochroman-3-ol**, a typical workflow for NMR signal assignment, and a troubleshooting decision tree.



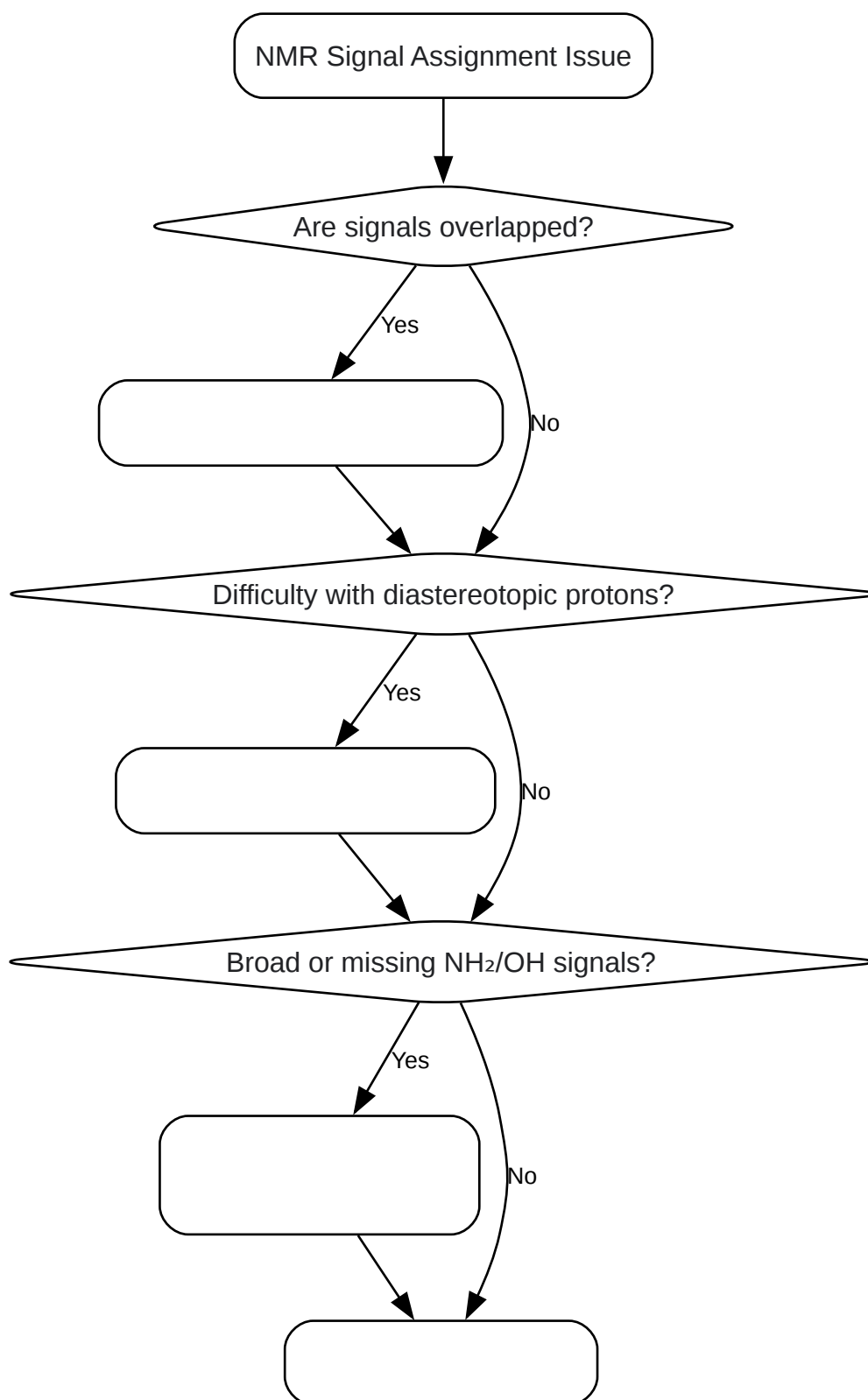
[Click to download full resolution via product page](#)

Caption: Structure of **4-Aminochroman-3-ol** with atom numbering.



[Click to download full resolution via product page](#)

Caption: Experimental workflow for NMR signal assignment.



[Click to download full resolution via product page](#)

Caption: Troubleshooting decision tree for NMR issues.

Need Custom Synthesis?

BenchChem offers custom synthesis for rare earth carbides and specific isotopic labeling.

Email: info@benchchem.com or [Request Quote Online](#).

References

- 1. youtube.com [youtube.com]
- 2. PROSPRE [prospre.ca]
- 3. mdpi.com [mdpi.com]
- 4. virtual Chemistry 3D - NMR predictor [vchem3d.univ-tlse3.fr]
- 5. Visualizer loader [nmrdb.org]
- 6. NMR Database for Faster Structural Data | CAS [cas.org]
- 7. Substituent Effects on NMR Spectroscopy of 2,2-Dimethylchroman-4-one Derivatives: Experimental and Theoretical Studies - PubMed [pubmed.ncbi.nlm.nih.gov]
- 8. mdpi.com [mdpi.com]
- 9. chem.libretexts.org [chem.libretexts.org]
- 10. Simulate and predict NMR spectra [nmrdb.org]
- 11. 1 h nmr spectrum using chemdraw | PPTX [slideshare.net]
- To cite this document: BenchChem. [Technical Support Center: NMR Signal Assignment for 4-Aminochroman-3-ol]. BenchChem, [2025]. [Online PDF]. Available at: [https://www.benchchem.com/product/b1641235#nmr-signal-assignment-issues-for-4-aminochroman-3-ol]

Disclaimer & Data Validity:

The information provided in this document is for Research Use Only (RUO) and is strictly not intended for diagnostic or therapeutic procedures. While BenchChem strives to provide accurate protocols, we make no warranties, express or implied, regarding the fitness of this product for every specific experimental setup.

Technical Support: The protocols provided are for reference purposes. Unsure if this reagent suits your experiment? [[Contact our Ph.D. Support Team for a compatibility check](#)]

Need Industrial/Bulk Grade? [Request Custom Synthesis Quote](#)

BenchChem

Our mission is to be the trusted global source of essential and advanced chemicals, empowering scientists and researchers to drive progress in science and industry.

Contact

Address: 3281 E Guasti Rd
Ontario, CA 91761, United States
Phone: (601) 213-4426
Email: info@benchchem.com